

Lesson 45

1. Shandra has 16 stickers. She buys 14 more stickers while she is on vacation. How many stickers does Shandra have now?

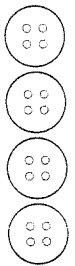

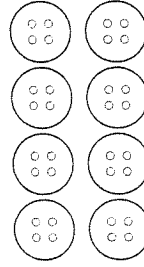
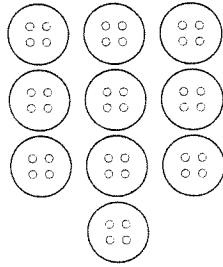

Shandra has _____ stickers now.

2. $40 + 30 =$

3. $18 - 15 =$

4. $15 + 3 =$

5. Draw the missing buttons in the box to complete the pattern.

**Lesson 46**

1. There are 12 campers in the lake for an afternoon swim. If 6 more campers join them, how many campers are in the lake in all?

There are _____ campers in the lake in all.

2. $5 + \underline{\quad} = 12$

3. $88 - 77 =$

4. $\underline{\quad} + 9 = 12$

5. Write the missing letters to complete the pattern.

J, A, K, A, L, A, M, A, _____, A, _____, A, P, A